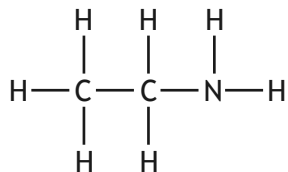
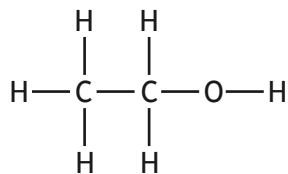


2. In which of the following compounds would hydrogen bonding **not** occur?

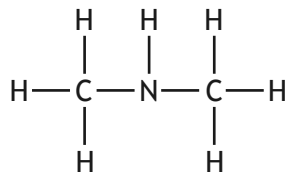
A



B



C



D

